




MINUTE 29



NAME _____

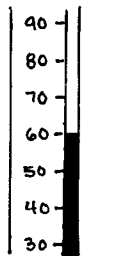
1. Write the missing family fact.

$$\begin{aligned} 7 + 5 &= 12 \\ 12 - 7 &= 5 \\ 12 - 5 &= 7 \end{aligned}$$

2.
$$\begin{array}{r} 62,197 \\ + 61,557 \\ \hline \end{array}$$

3. Can 226 be divided evenly by 9? Circle: Yes or No

4. What temperature is shown on the thermometer? _____



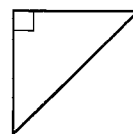
5.
$$\begin{array}{r} 40.42 \\ - 17.19 \\ \hline \end{array}$$

6. Circle the digit in the thousandths place: 4.58020

7. How much money is 1 quarter, 1 dime, and 2 pennies? _____

8.
$$\begin{array}{r} \$3.70 \\ - \$2.18 \\ \hline \end{array}$$

9. Circle the name of the triangle:
isosceles equilateral scalene right



10. $n + 11 = 25$; $n =$ _____