

MINUTE 30

NAME _____

1. $10 \times 10 =$

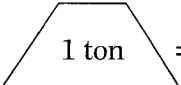
2. $144 \div 8 =$

3. $37 + y = 87; y =$

4. Round $3.\underline{1}015$ to the underlined place. _____

5.
$$\begin{array}{r} \$13.07 \\ + \$0.51 \\ \hline \end{array}$$

6. Name the digit in the ten billions place. 198,416,876,543 _____

7.  1 ton = 2,000 lbs

4 tons = _____ pounds

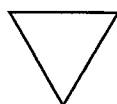
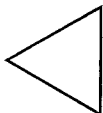
8. Write the missing family fact.

$8 + 5 = 13$

$5 + 8 = 13$

$13 - 5 = 8$

9. Are the triangles congruent? _____



10. Write the numbers in order from least to greatest.

16.15

15.16

16.51

16.01
