

# MINUTE 37

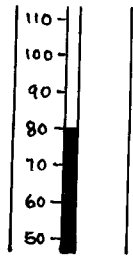
NAME \_\_\_\_\_

1. Write the missing family fact.  
 $3 \times 6 = 18$   
 $18 \div 6 = 3$   
 $18 \div 3 = 6$

2.  $\begin{array}{r} \$10.91 \\ - \$9.25 \\ \hline \end{array}$

\_\_\_\_\_

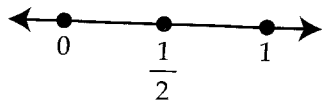
3. What would the temperature be if it fell 15 degrees? \_\_\_\_\_



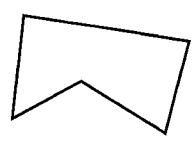
4. 4 feet 6 inches - 2 feet 4 inches = \_\_\_\_\_ feet \_\_\_\_\_ inches

5.  $900 \div 90 =$

6. If placed on the number line, is  $\frac{11}{12}$  closer to 0,  $\frac{1}{2}$ , or 1? \_\_\_\_\_



7. Is the shape symmetric?  
 Circle: Yes or No



8.  $\begin{array}{r} \$6.85 \\ + \$2.03 \\ \hline \end{array}$

9. Circle the digit in the hundredths place: 16.19

10.  $\begin{array}{r} 520,776 \\ - 87,644 \\ \hline \end{array}$