




MINUTE 39



NAME _____

1. How much money is 1 quarter, 1 dime, 1 nickel, and 2 pennies? _____

2.
$$\begin{array}{r} 186 \\ \times 3 \\ \hline \end{array}$$


3.
$$\begin{array}{r} 211.6 \\ - 16.12 \\ \hline \end{array}$$

4. 2,000 lb = _____ T

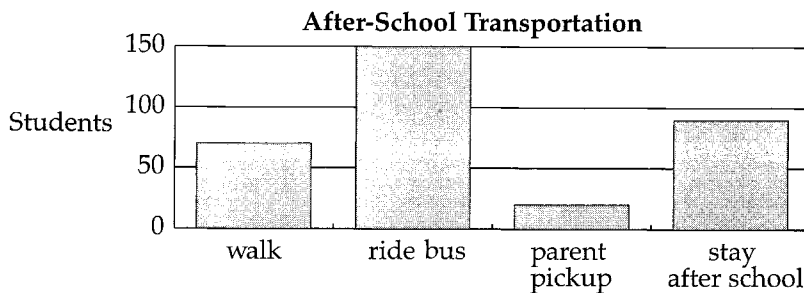
5. Circle the digit in the tenths place: 15.16

6.
$$\begin{array}{r} 241,813 \\ + 281,529 \\ \hline \end{array}$$

7. Circle the name of the angle:
acute right obtuse



Use the bar graph to complete questions 8–10.



8. Do more students walk home or stay after school? _____

9. How many students ride the bus? _____ students

10. What is the least common after-school transportation? _____