

MINUTE 45

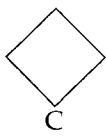
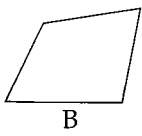
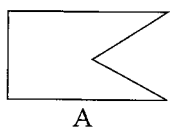
NAME _____

1. Can 1,025 be evenly divided by 5? _____

2. 21 days = _____ weeks

3. There are 42 weeks in one year. Circle: True or False

4. Circle the quadrilateral that does not belong:




5. $6 \times n = 78$; $n =$

6. 125 minutes = _____ hour(s) _____ minute(s)

7. $0.25 \times 10 =$

8. Write the measurement as shown by the arrow. _____ inches



9.
$$\begin{array}{r} 1,803 \\ \times \quad 72 \\ \hline \end{array}$$

10.
$$9 \overline{)3,060}$$