




MINUTE 46



NAME _____

1. How much money is 1 quarter, 2 dimes, and 6 pennies? _____

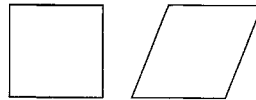
2.
$$\begin{array}{r} \$1.42 \\ \times \quad 4 \\ \hline \end{array}$$

3.
$$7 \overline{)44.45}$$

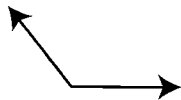
4. 17 feet 5 inches - 8 feet 3 inches = _____ feet _____ inches

5. $21 \div 5 =$

6. Are the two shapes congruent?
Circle: Yes or No



7. Circle the name of the angle: acute right obtuse



8.
$$\begin{array}{r} 6,127 \\ \times \quad 5 \\ \hline \end{array}$$

9. A number is divisible by 4 if the last two digits are divisible by 4.
Circle: True or False

10. rate = 45 miles/hour
If a bus travels for 4 hours, how many miles will it travel? _____ miles